

Division 3:

**Maps: Creswick 1:100000
Dunolly 1:100000**

Stage 3.1: Cairn Curran Chicanery

Maps: Creswick 1:100000
Dunolly 1:100000

Start: Carisbrook (GR 504 959)
Exit to the NW

Via 1: the following route chart

Cumulative	Intermediate	Instruction
0.0	0.0	S.O. and F.M.R.
1.8	1.8	B.R. and F.M.R.
3.7	1.9	B.R.
10.1	6.4	T.R. and F.M.R.
21.2	11.1	T.R.
26.4	5.2	T.L.
29.9	3.5	T.L.
34.9	5.0	B.R. and F.M.R.
37.0	2.1	Control

Finish: As directed by the Route Chart.

Questions:

1. What "property" do you pass just before your first T.R. on the route chart?
2. At the second turn right on the route chart, how far is it to Carisbrook?
3. What reservoir do you pass halfway between your second T.R. and your first T.L. on the route chart?
4. Where is the finish control?
5. On the sealed sections of the route you can average 90 km/hr. On the unsealed sections of the route you can only average 55 km/hr. What is your time, to the nearest minute, for this stage?

Stage 3.2: Llodden lloop to Llanelly

Map: Dunolly 1:100000

Start: MRJ on Bridgewater Maldon Road, approximately 7 km East of Eddington.
(GR 617 134)

Via 1: The one way bridge at Laanecoorie. Enter from the SE

Via 2: The one way bridge at Newbridge. Enter from the ESE

Finish: Llanelly railway crossing. Enter from the ESE

Questions:

1. How far, via the rally route, from Via 1 to Via 2? (nearest km)
2. How many (mapped) bridges/causeways do you cross in this stage?
3. Where does the underground pipeline start and stop?
4. When you cross the bridge at Laanecoorie, should the water be flowing to your right or left?

Stage 3.3: Rheola Rendezvous

Map: Dunolly 1:100000

Start: MRJ 300 metres West of the Llanelly railway crossing. (GR 550 307)
Exit to the SSE.

Via 1: Sealed roads only

Via 2: No section of road can be re-used during the stage
(ie. all roads are "one-way")

Via 3: Rheola (GR 412 403)

Finish: MRJ 300 metres West of the Llanelly railway crossing. (GR 550 307)

Questions:

1. When you cross the railway for the second time, what is on your right?
2. What is the last (named) creek that you cross before the finish?
3. How many cemeteries did you pass?
4. Name any towns visited, in order, that gives some sense of the route taken:
.....

Stage 3.4: Railway Rapport

Map: Dunolly 1:100000

Start: The (other) Llanelly rail crossing (SE of Llanelly on the Dunolly-Inglewood Rd) (GR 548 303) Exit to the SSW.

Via 1: Roads that keep you as close to the railway line as possible.

Via 2: no other rail crossings on this stage.

Via 3: MRJ at GR 473 223. Exit to the WSW

Finish: The "oval" in Dunolly.

Questions:

1. Between Llanelly and Tarnagulla, what are there plenty of?
2. After Tarnagulla, how many kilometres are travelled along the Bridgewater-Dunolly Road?
3. What ranges are you travelling through?
4. After the exit from Via 3, complete the route chart from Via 3 to Control:

Cumulative	Instruction
0.0	S.O.
1.4
.....
.....
.....
.....
..... and F.M.R.
.....	Control

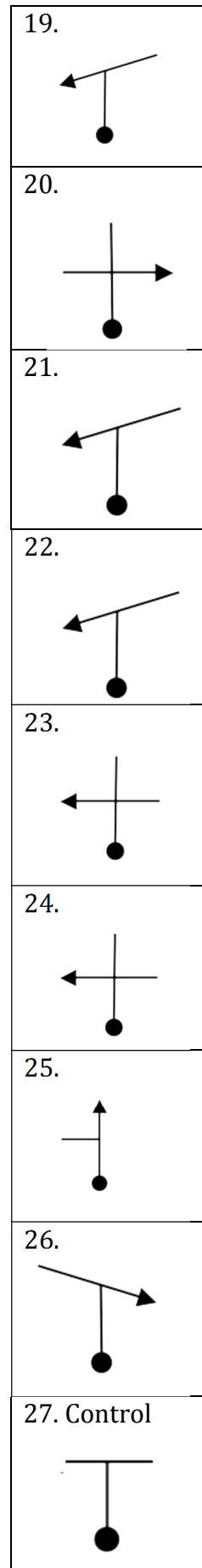
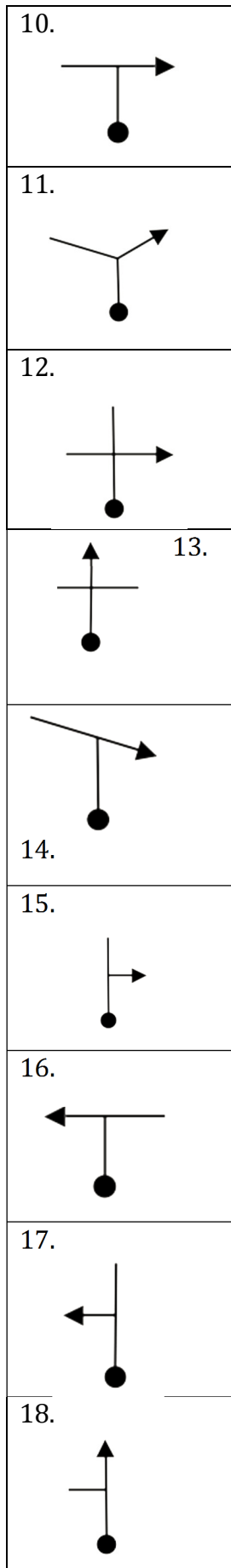
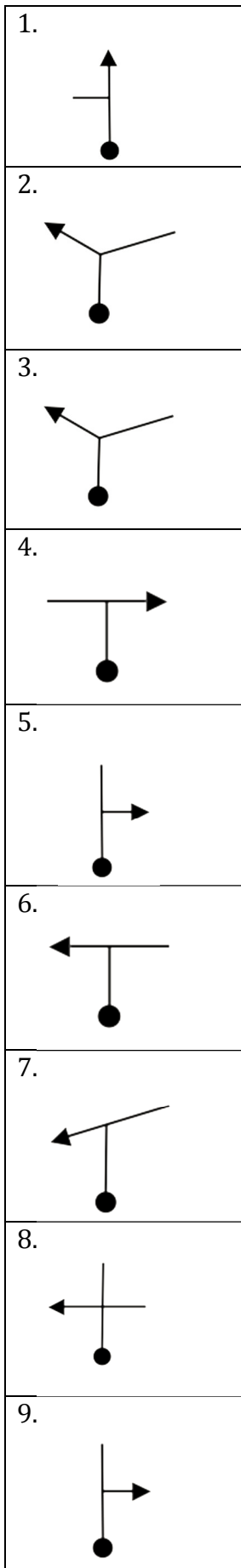
Stage 3.5: Tiptoe through the tulips

Map: Dunolly 1:100000

Start: Dunolly

Via 1: MRJ at GR 394 243
Enter from the West

Via 2: Exit Via 1 to the East and follow the tulip diagrams. (on next page)



Finish: MRJ at GR 394 243

Enter from the South

Questions:

1. How many sections of the stage are used twice, travelling in the same direction?
(A "section" of road is to be considered as a length of road between two intersections.)
.....
2. How many sections of the stage are used twice, travelling in
different directions?
3. How many sections of the stage are used more than twice?
4. How many times do you pass the water tank at GR 414 246 ?
5. What are the 2 (named) creeks that you cross in this forest?

Stage 3.6: Final fling

Map: Dunolly 1:100000

Start: MRJ at GR 394 243

Via 1: MRJ 3.6 km (by road) NW of the
MRJ located approximately 1 km NNW (as the crow flies) of the
Railway Station located 2 stops North West of the
Railway Station that has the name that repeats itself located
approximately 2 km NE of the confluence of the Carmanuel and Emu
Creeks.

Finish: MRJ closest to the Church in Moliagul.
Enter from the SSE

Questions:

1. What is the distance travelled from the start to Via 1?
2. What are the names of the Railway Stations referred to in Via 1?
3. What creek do the Carmanuel and Emu Creeks eventually flow into?
4. What was welcome?
5. If the entire section has a time of 10 minutes to complete, and you have averaged 70
km/hr by the time you get to Via1, what does your average speed need to be for the
remaining part of the stage?
.....

Congratulations on making it to Moliagul, the home of the Welcome Stranger and "Flynn of the Inland".